






Completa.



$$\square > 0$$



$$\square = \square$$



$$\square < \square$$



Completa por ordem crescente.

$$0 < \square < \square < 3 < \square < 5 < \square < 7 < \square < \square$$



Completa por ordem decrescente.

$$9 > \square > 7 > \square > \square > 4 > \square > \square > \square > 0$$



Desenha os peixinhos nos aquários.

