





Observa e calcula.



$5 + \underline{\quad} = \underline{\quad}$

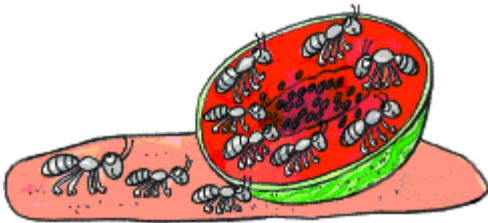
$10 - \underline{\quad} = \underline{\quad}$



$4 + \underline{\quad} = \underline{\quad}$

$10 - 4 = \underline{\quad}$


$\underline{\quad} - \underline{\quad} = 4$



$3 + \underline{\quad} = \underline{\quad}$

$10 - 3 = \underline{\quad}$

$\underline{\quad} - \underline{\quad} = 3$



$2 + \underline{\quad} = \underline{\quad}$

$10 - 8 = \underline{\quad}$

$\underline{\quad} - \underline{\quad} = 8$



Completa para obteres 8.

