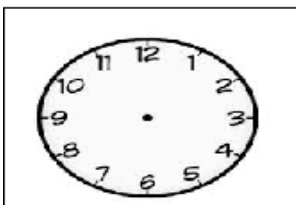


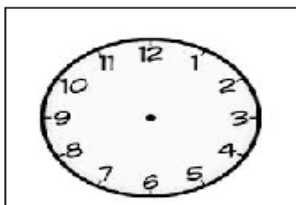
COLOQUE OS NÚMEROS EM ORDEM CRESCENTE:

4 7 0 5 8 1 6 2 9 3

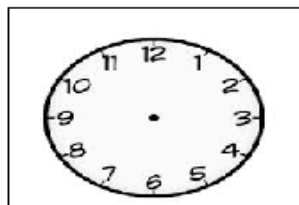
COLOQUE A DATA CORRETA:



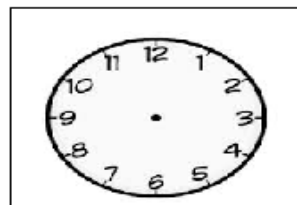
7 HORAS



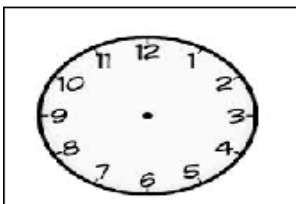
5 HORAS



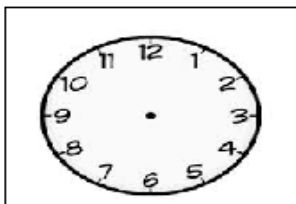
3 HORAS



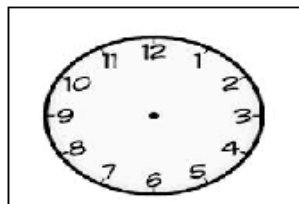
2 HORAS



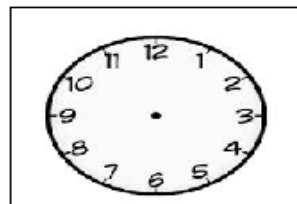
9 HORAS



4 HORAS



10 HORAS



1 HORA

FAÇA ESTES CÁLCULOS:

2	5
---	---

+	2	2
---	---	---



--	--

3	4
---	---

+	2	3
---	---	---



--	--

4	2
---	---

+	4	5
---	---	---



--	--

2	8
---	---

+	1	1
---	---	---



--	--

2	4
---	---

+	2	4
---	---	---



--	--

3	2
---	---

+	1	7
---	---	---



--	--

FAÇA ESTES CÁLCULOS:

$$\begin{array}{|c|c|} \hline 2 & 5 \\ \hline \end{array}$$

$$\begin{array}{|c|c|} \hline - & & 4 \\ \hline \end{array}$$



$$\begin{array}{|c|c|} \hline & \\ \hline \end{array}$$

$$\begin{array}{|c|c|} \hline 3 & 4 \\ \hline \end{array}$$

$$\begin{array}{|c|c|} \hline - & 2 & 3 \\ \hline \end{array}$$



$$\begin{array}{|c|c|} \hline & \\ \hline \end{array}$$

$$\begin{array}{|c|c|} \hline 1 & 7 \\ \hline \end{array}$$

$$\begin{array}{|c|c|} \hline - & & 5 \\ \hline \end{array}$$



$$\begin{array}{|c|c|} \hline & \\ \hline \end{array}$$

$$\begin{array}{|c|c|} \hline 3 & 6 \\ \hline \end{array}$$

$$\begin{array}{|c|c|} \hline - & 2 & 2 \\ \hline \end{array}$$



$$\begin{array}{|c|c|} \hline & \\ \hline \end{array}$$

$$\begin{array}{|c|c|} \hline 4 & 4 \\ \hline \end{array}$$

$$\begin{array}{|c|c|} \hline - & 2 & 3 \\ \hline \end{array}$$



$$\begin{array}{|c|c|} \hline & \\ \hline \end{array}$$

$$\begin{array}{|c|c|} \hline 2 & 0 \\ \hline \end{array}$$

$$\begin{array}{|c|c|} \hline - & 1 & 0 \\ \hline \end{array}$$



$$\begin{array}{|c|c|} \hline & \\ \hline \end{array}$$