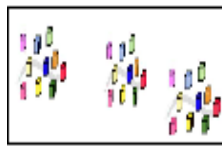


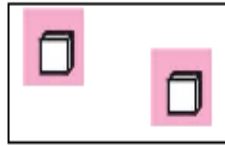

DEZENA

UNIDADE



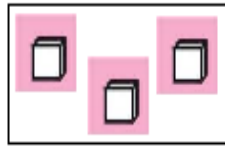

=

35



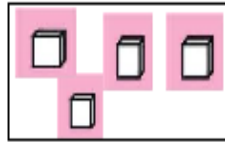

=

30



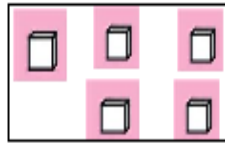

=

33




=

39



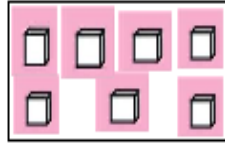

=

38



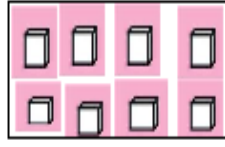

=

37





=

36



=

34



=

32

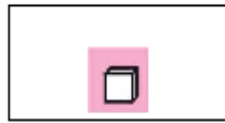



=

31

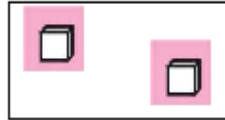
DEZENA

UNIDADE



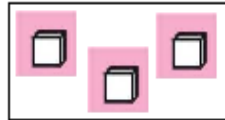
=

26



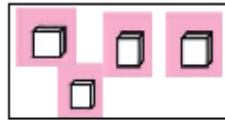
=

24



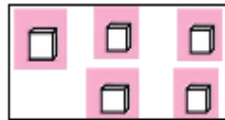

=

21




=

23



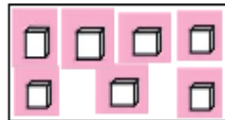

=

20



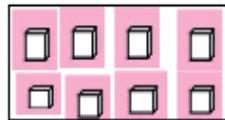
=

29




=

28




=

27



=

25



=

22

$$\begin{array}{r} 8 \\ + 1 \\ \hline \end{array}$$

$$\begin{array}{r} 2 \\ + 2 \\ \hline \end{array}$$

$$\begin{array}{r} 3 \\ + 2 \\ \hline \end{array}$$

$$\begin{array}{r} 5 \\ + 2 \\ \hline \end{array}$$

$$\begin{array}{r} 5 \\ + 4 \\ \hline \end{array}$$

$$\begin{array}{r} 5 \\ + 4 \\ \hline \end{array}$$

RESOLVA ESTAS CONTAS:

	1	2			1	3			1	4			1	4		
+	1	2			1	3			1	4			1	2		
	2	4														

0	1	2	3	4	5	6	7	8	9
---	---	---	---	---	---	---	---	---	---

	1	5			1	6			1	7			1	9		
+	1	4			1	2			1	1			1	0		

	1	3	4
+	1	3	3
<hr style="border: 2px solid red;"/>			

	5	6	7
+	4	2	2
<hr style="border: 2px solid red;"/>			

RESOLVA ESTES CÁLCULOS:

	2	5
-	1	2

	2	4
-	1	1

	2	9
-	1	3

	2	9
-	1	4















	2	9
-	1	7

	3	2
-	1	1

	1	7
-	1	2

	1	9
-	1	7

FAÇA OS CÁLCULOS:

	+		=	
	+		=	
	+		=	
	+		=	
	+		=	
	+		=	
	+		=	

RESOLVA ESTES CÁLCULOS:

	D	U
	4	3
+		5
<hr/>		

	D	U
	5	2
+		6
<hr/>		



	D	U
	2	7
+	1	1
<hr/>		



	D	U
	4	2
+	3	5
<hr/>		

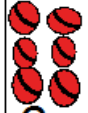

	D	U
	7	0
+	1	4
<hr/>		



	D	U
	3	3
+	4	4
<hr/>		



FAÇA OS CÁLCULOS:



 	
$1 + 1 =$	



 	
$3 + 1 =$	



 	
$6 + 4 =$	



 	
$2 + 2 =$	



 	
$3 + 4 =$	



 	
$1 + 7 =$	



 	
$3 + 2 =$	

 	
$4 + 4 =$	

 	
$6 + 2 =$	

 	
$3 + 3 =$	

 	
$5 + 4 =$	

 	
$5 + 5 =$	

			5	7				3	9				3	8
+	3	5				+	2	6				+	3	8

			6	5				3	8	
+	1	7				+	3	8		