









PEÇA PARA ALGUÉM AJUDAR VOCÊ, RECORTE AS FIGURAS E COLE NO LOCAL CERTO:




PEÇA PARA ALGUÉM AJUDAR VOCÊ, RECORTE AS FIGURAS E COLE NO LOCAL CERTO:

1		
---	---	--

2	 	
---	--	--

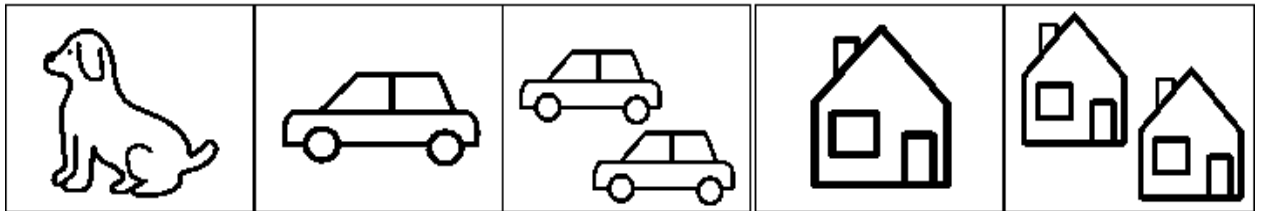
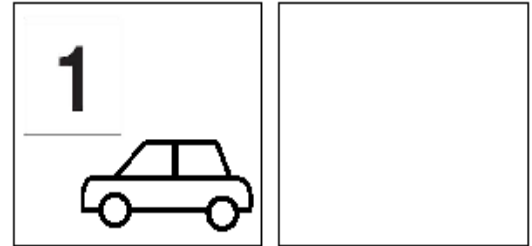
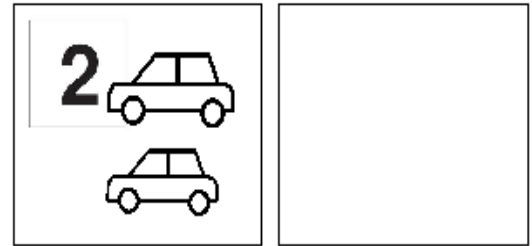

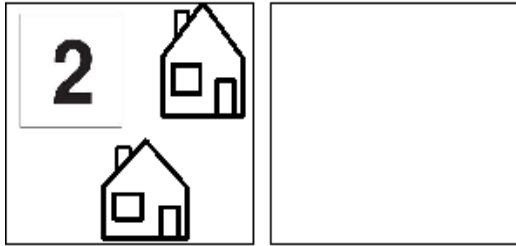
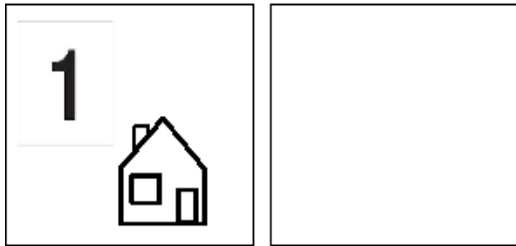
1		
---	--	--

2	 	
---	--	--

1		
---	--	--

	 		 	
---	--	---	---	---

PEÇA PARA ALGUÉM AJUDAR VOCÊ, RECORTE AS FIGURAS E COLE NO LOCAL CERTO:



COLE OS NÚMEROS NO LOCAL CERTO:

1

2

1

1

1

1

1

1

1

1

1

2

2

2

2

2

2

2

2

2

COLE OS NÚMEROS NO LOCAL CERTO. PEÇA PARA ALGUÉM AJUDAR VOCÊ A RECORTAR OS NÚMEROS:

2						2	
1						1	
1						2	
2						1	

2	1	2	1	2	1	2	1
---	---	---	---	---	---	---	---

1	+	1	=	
---	---	---	---	--


1	+	2	=	
---	---	---	---	--

1	+	3	=	
---	---	---	---	--


1	+	4	=	
---	---	---	---	--

1	+	5	=	
---	---	---	---	--


1	+	4	=	
---	---	---	---	--




+



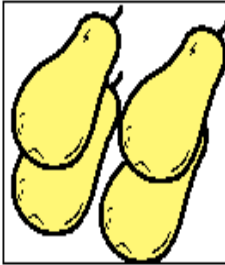
=




8




+




=




5




+




=




2



+



=



4

5	+	5	=	○	9
3	+	6	=	○	10
6	+	4	=	○	8
7	+	1	=	○	6
6	+	2	=	○	7

FAÇA ESTES CÁLCULOS:

$4 + 4 = \square$

$1 + 7 = \square$

$5 + 3 = \square$

$2 + 6 = \square$

$6 + 4 = \square$

$3 + 7 = \square$

$7 + 1 = \square$

$4 + 5 = \square$

























$8 + 0 = \square$

$5 + 4 = \square$

$9 + 1 = \square$

$6 + 3 = \square$

FAÇA OS CÁLCULOS:

  $1 + 1 =$	<input type="text"/>	  $3 + 1 =$	<input type="text"/>	  $6 + 4 =$	<input type="text"/>
  $2 + 2 =$	<input type="text"/>	  $3 + 4 =$	<input type="text"/>	  $1 + 7 =$	<input type="text"/>
  $3 + 2 =$	<input type="text"/>	  $4 + 4 =$	<input type="text"/>	  $6 + 2 =$	<input type="text"/>
  $3 + 3 =$	<input type="text"/>	  $5 + 4 =$	<input type="text"/>	  $5 + 5 =$	<input type="text"/>

$1 + 1 =$	<input type="text"/>
$1 + 2 =$	<input type="text"/>
$1 + 3 =$	<input type="text"/>
$1 + 4 =$	<input type="text"/>
$1 + 5 =$	<input type="text"/>
$1 + 6 =$	<input type="text"/>
$1 + 7 =$	<input type="text"/>
$1 + 8 =$	<input type="text"/>
$2 + 3 =$	<input type="text"/>
$2 + 4 =$	<input type="text"/>

$3 + 3 =$	<input type="text"/>
$3 + 4 =$	<input type="text"/>
$4 + 4 =$	<input type="text"/>
$2 + 5 =$	<input type="text"/>
$5 + 4 =$	<input type="text"/>
$5 + 3 =$	<input type="text"/>
$5 + 4 =$	<input type="text"/>
$6 + 2 =$	<input type="text"/>
$7 + 1 =$	<input type="text"/>
$2 + 7 =$	<input type="text"/>

	<input type="text"/>	1		<input type="text"/>
	<input type="text"/>	2		<input type="text"/>
	<input type="text"/>	3		<input type="text"/>
	<input type="text"/>	4		<input type="text"/>
	<input type="text"/>	5		<input type="text"/>
	<input type="text"/>	6		<input type="text"/>
	<input type="text"/>	7		<input type="text"/>
	<input type="text"/>	8		<input type="text"/>
	<input type="text"/>	9		<input type="text"/>
	<input type="text"/>	10		<input type="text"/>