
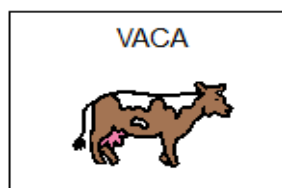


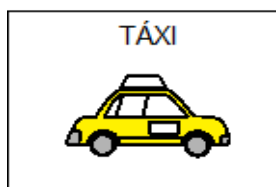
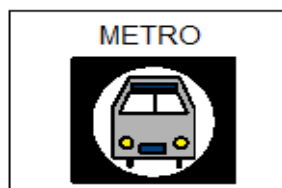


Ordena o que encontras na cidade e no campo

--	--	--	--	--




→ VAMOS AJUDAR NOSSO PLANETA ? ELE ESTÁ EM PERIGO.



LIXO ORGÂNICO

LIXO RECICLÁVEL


Onde vivo? Põe os animais no lugar onde vivem



animais terrestres



animais marinhos



VAMOS



RECICLAR



O



LIXO



E



AJUDAR



O



NOSSO







PLANETA?



LIXO ORGÂNICO

LIXO RECICLÁVEL

JUNTE OS ANIMAIS AO QUE ELE COME



VAMOS APRENDER SOBRE OS MOVIMENTOS DA TERRA:

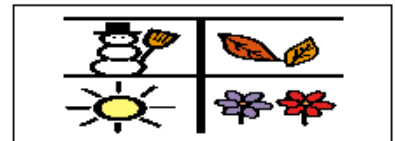
    
O MOVIMENTO DE ROTAÇÃO DA TERRA DÁ ORIGEM AOS:

--	--

     
O MOVIMENTO DE TRANSLAÇÃO DA TERRA DÁ ORIGEM AS:

--

USE AS GRAVURAS ABAIXO PARA RESPONDER AS PERGUNTAS:

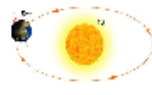




O MOVIMENTO



DE




ROTAÇÃO TEM

A

DURAÇÃO



DE:


<input type="text"/>	
	HORAS:



O MOVIMENTO



DE




TRANSLAÇÃO TEM

A

DURAÇÃO



DE:

<input type="text"/>		OU SEJA	<input type="text"/>	199_
	DIAS			ANO

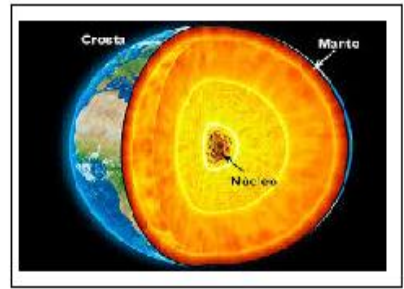
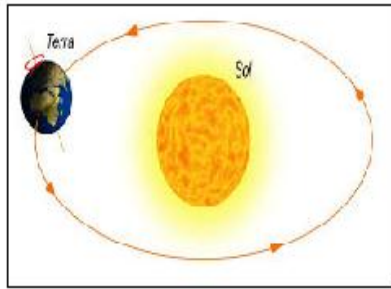
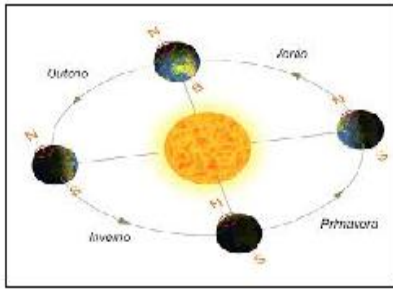
365

24

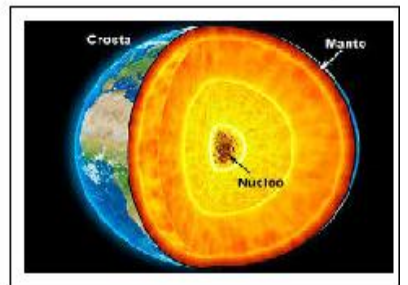
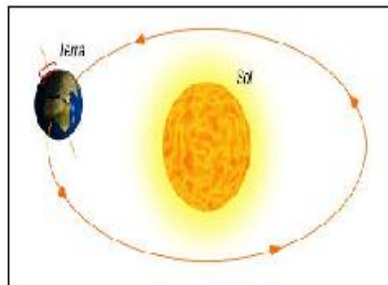
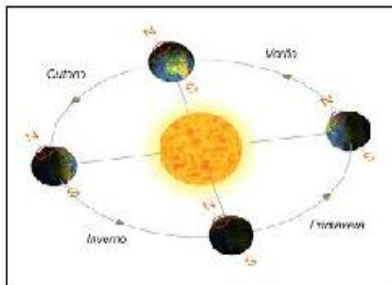
1

direita
→

MARQUE COM UM X O DESENHO QUE MOSTRA O MOVIMENTO DE ROTAÇÃO DA TERRA:

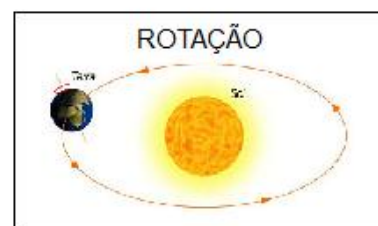

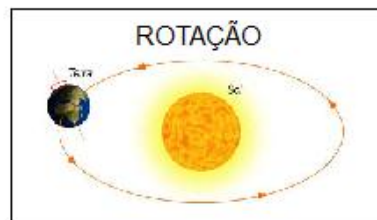




MARQUE COM UM X O DESENHO QUE MOSTRA O MOVIMENTO DE TRANSLAÇÃO DA TERRA:



direita
→

IDENTIFIQUE QUAL MOVIMENTO É REPRESENTADO NA IMAGEM:




OBSERVE O DESENHO E COMPLETE:

NORTE

SUL

LESTE

OESTE



OBSERVE O DESENHO E COMPLETE:

NORTE

SUL

LESTE

OESTE

